

# Winter

## Counting

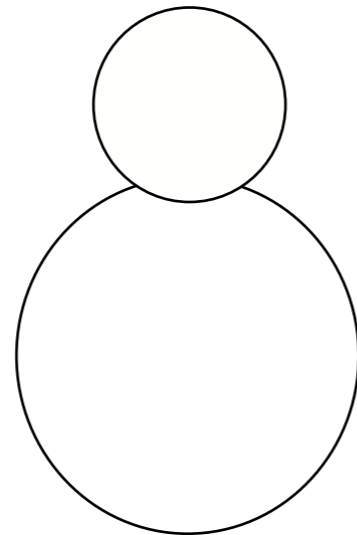
How many birds are in the tree?



Two more birds land in the tree.  
How many are there now?

## Reading numbers

Draw 2 eyes and 1 nose on the snowman.



Now draw on 5 buttons.

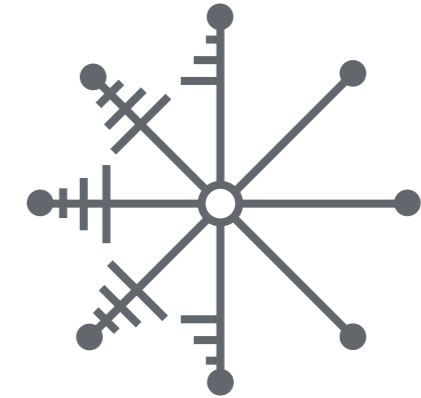
## Patterns

Continue the patterns on the scarfs.



## Symmetry

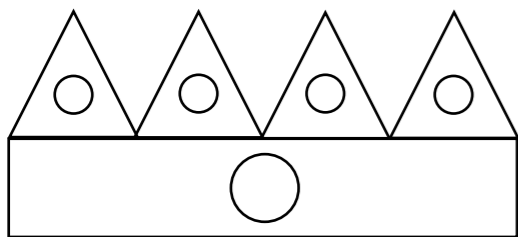
Can you finish drawing the snowflake so both sides match?



How many circles does the snowflake have?

## Shapes

Here is a party hat.



Colour the triangles in **red**.  
How many triangles are on the hat?

Colour the circles in **yellow**.  
How many circles are on the hat?

Colour the rectangles in **blue**. How many rectangles are on the hat?

## Taking away

How many candles are there?  
Colour them in as you count.



If you blow out 3 candles, how many will be left?

Use the number line to help you.




## Money

George has these coins.



Which gingerbread man can George buy?  
Circle the correct answer.



## Measuring

Here are two Christmas trees.



How tall is the **biggest** tree?  cm

How tall is the **smallest** tree?  cm